



Oxford Cambridge and RSA

Tuesday 17 May 2022 – Morning

AS Level Chemistry B (Salters)

H033/01 Foundations of chemistry

Time allowed: 1 hour 30 minutes



You must have:

- the Data Sheet for Chemistry B

You can use:

- a scientific or graphical calculator
- an HB pencil



Please write clearly in black ink. **Do not write in the barcodes.**

Centre number

--	--	--	--	--

Candidate number

--	--	--	--

First name(s) _____

Last name _____

INSTRUCTIONS

- Use black ink. You can use an HB pencil, but only for graphs and diagrams.
- Write your answer to each question in the space provided. If you need extra space use the lined pages at the end of this booklet. The question numbers must be clearly shown.
- Answer **all** the questions.
- Where appropriate, your answer should be supported with working. Marks might be given for using a correct method, even if your answer is wrong.

INFORMATION

- The total mark for this paper is **70**.
- The marks for each question are shown in brackets [].
- This document has **16** pages.

ADVICE

- Read each question carefully before you start your answer.

2
SECTION A

You should spend a maximum of 25 minutes on this section.

Answer **all** the questions.

Write your answer to each question in the box provided.

1 Which ion has the same electron configuration as Ca^{2+} ?

- A Al^{3+}
- B Br^-
- C K^+
- D Mg^{2+}

Your answer

[1]

2 Sodium has a lower melting point than magnesium.

What is a reason for this?

- A Magnesium has more delocalised electrons per atom.
- B Magnesium is more ionic.
- C Melting points decrease across Period 3.
- D Sodium has a covalent structure.

Your answer

[1]

3 Which row is correct for the properties of the solids shown?

	Solid	Melting point	Electrical conductivity
A	graphite	high	poor
B	iodine	high	poor
C	iron	low	good
D	sodium chloride	high	poor

Your answer

[1]

3

4 Which compound is a saturated aliphatic hydrocarbon?

- A benzene
- B cyclohexane
- C cyclohexene
- D hexene

Your answer

[1]

5 Which reaction has the **largest** atom economy for the formation of the organic product?

- A $C_2H_4 + Br_2 \rightarrow C_2H_4Br_2$
- B $C_2H_5Br + Br_2 \rightarrow C_2H_4Br_2 + HBr$
- C $C_6H_6 + Br_2 \rightarrow C_6H_5Br + HBr$
- D $C_2H_6 + Br_2 \rightarrow C_2H_5Br + HBr$

Your answer

[1]

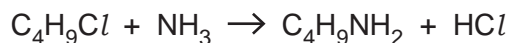
6 What is a correct property of hydrogen iodide gas?

- A It has high thermal stability.
- B It is neutral in solution.
- C It is unreactive with ammonia.
- D It reduces sulfuric acid to hydrogen sulfide.

Your answer

[1]

7 Which statement correctly describes the reaction below?



- A Ammonia adds to a haloalkane to form an amine.
- B Ammonia is displacing hydrogen chloride.
- C An amine is formed in a substitution reaction.
- D Chloropropane is reacting with ammonia.

Your answer

[1]

4

8 Which of these compounds will have the highest boiling point?

- A CH_3CHO
- B $\text{CH}_3\text{CH}_2\text{OH}$
- C $\text{HOCH}_2\text{CH}_2\text{OH}$
- D CH_3OCH_3

Your answer

[1]

9 What is the final stage in the purification of a liquid organic product?

- A distillation
- B drying
- C neutralisation
- D separation

Your answer

[1]

10 What is a correct formula for an iron salt?

- A FeCO_3
- B $\text{Fe}_2(\text{NO}_3)_3$
- C FeNO_3
- D Fe_2SO_4

Your answer

[1]

11 Which molecule has the largest bond angle?

- A BF_3
- B CHF_3
- C NF_3
- D PF_3

Your answer

[1]

5

12 Ethene is reacted with the reagents shown below.

Which row correctly describes the products?

	Hydrogen and platinum	Hydrogen bromide	Steam/phosphoric acid with heat and pressure
A	ethane	1,2-dibromoethane	ethanal
B	ethane	bromoethane	ethanol
C	no reaction	1,2-dibromoethane	ethanol
D	no reaction	bromoethane	ethanal

Your answer

[1]

13 What mass of Na_2CO_3 is needed to make up 250 cm^3 of a 0.100 mol dm^{-3} solution?

(Na, 23; C, 12; O, 16)

A 2.65 g

B 3.57 g

C 10.6 g

D 26.5 g

Your answer

[1]

14 A compound has the structure shown.



What is a correct property of this compound?

A It fizzes with NaOH(aq) .

B It gives a purple colour with neutral iron(III) chloride.

C It is neutral in solution.

D When it is heated with acidified dichromate(VI), a green solution is formed.

Your answer

[1]

6

- 15 Silver nitrate solution, followed by ammonia solution, is added to solutions of the potassium halides.

What is correct?

- A Potassium bromide gives a yellow precipitate, soluble in ammonia.
- B Potassium chloride gives a white precipitate, soluble in ammonia.
- C Potassium iodide gives a purple precipitate, insoluble in ammonia.
- D Potassium iodide gives a white precipitate, partially soluble in ammonia.

Your answer

[1]

- 16 The density of a gas is given by mass/volume.

What is a correct expression for the density?

- A p/RT
- B $M_r p/RT$
- C RT/p
- D $p/M_r RT$

Your answer

[1]

- 17 How many **unsaturated** structural and *E/Z* isomers of butene are there?

- A 3
- B 4
- C 5
- D 6

Your answer

[1]

18 The mass spectrum of $(C_3H_7)_2O$ has peaks at m/z 103, 102, 43 and other values.

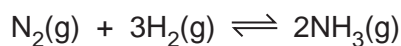
What is correct?

- A 102 is caused when the molecule gains an electron in the mass spectrometer.
- B 103 is caused by the presence of 2H in the molecule.
- C The peaks at other values are caused by fragments of the molecule.
- D The peak at 43 is caused by impurities.

Your answer

[1]

19 Ammonia is made by the following reaction.



40 cm³ of hydrogen is reacted with excess nitrogen.

10 cm³ of ammonia is found in the equilibrium mixture.

All volumes are measured at the same temperature and pressure.

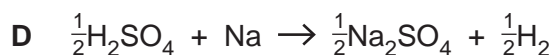
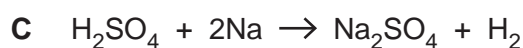
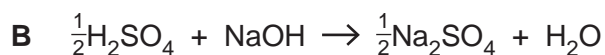
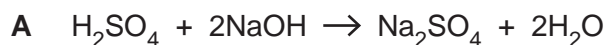
What volume of hydrogen remains?

- A 15 cm³
- B 20 cm³
- C 25 cm³
- D 30 cm³

Your answer

[1]

20 What represents the enthalpy change of neutralisation of sulfuric acid?



Your answer

[1]

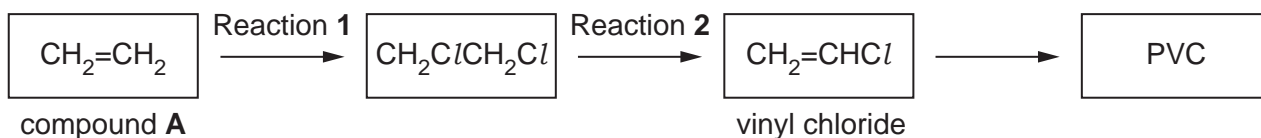
8

SECTION B

Answer **all** the questions.

- 21 Vinyl chloride, CH_2CHCl , is an important industrial chemical as it can be polymerised to make the polymer polyvinyl chloride, PVC.

The flowchart below shows how PVC is made.



- (a) (i) Give the systematic names for compound A and vinyl chloride.

compound A

vinyl chloride

[2]

- (ii) Draw a dot-and-cross diagram for vinyl chloride.

[2]

- (iii) Give the reagent for Reaction 1.

..... [1]

- (iv) Draw the repeating unit of the structure of PVC.

[1]

22 The American Environmental Protection Agency (EPA) describes ozone as 'Good up high, bad nearby'.

(a) (i) State **two** polluting effects of ozone in the **troposphere**.

1.

.....

2.

.....

[2]

(ii) According to the EPA, exposure to 0.07 ppm of ozone for 8 or more hours is dangerous.

A scientist measures the ozone concentration in the air of a town as 1.0×10^{-6} %.

Is this a dangerous ozone concentration? Show your calculation.

[1]

(b) In the stratosphere, ozone acts as a sunscreen, blocking out high-energy UV radiation.

Give **one** way in which high-energy UV is harmful to humans.

.....

..... [1]

23 Sodium hypochlorite, NaOCl , is a chemical present in chlorine bleaches.

It acts as a bleach by oxidising stains to colourless compounds.

(a) Give the systematic name for NaOCl .

..... [1]

(b) Sodium hypochlorite is made by electrolysing brine, NaCl(aq) , and allowing the products to mix.

(i) Give the half-equation for the reaction at the **positive** electrode when NaCl(aq) is electrolysed.

[1]

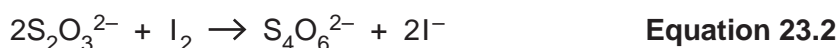
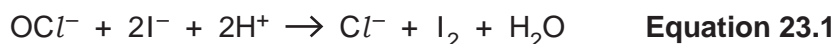
(ii) Give the half-equation for the production of hydroxide ions (and a gas) at the **negative** electrode when NaCl(aq) is electrolysed.

[1]

(iii) Suggest the equation for the two electrode products reacting to give OCl^- ions.

[1]

(c) The concentration of a bleach in solution can be measured by reacting the bleach with acidified iodide ions. The iodine that is formed is then titrated with sodium thiosulfate solution.



(i) State which atoms are being oxidised in **equation 23.2** and give their change in oxidation state.

..... is being oxidised from to [2]

(ii) A group of students measure out 25 cm^3 of a bleach solution in a measuring cylinder and pour it into a conical flask. The students add excess hydrochloric acid and excess potassium iodide solution. They are supplied with 1.60 mol dm^{-3} sodium thiosulfate solution.

Describe how the students should go on to obtain the results to calculate the average titre of sodium thiosulfate needed. They add starch solution near the end point.

.....

 [3]

13

- (iii) The students find that 25 cm^3 of the bleach solution needs 20.3 cm^3 of 1.60 mol dm^{-3} sodium thiosulfate.

Calculate the concentration of NaOCl in the bleach solution in g dm^{-3} .

Give your answer to an **appropriate** number of significant figures.

concentration of $\text{NaOCl} = \dots\dots\dots \text{g dm}^{-3}$ [4]

- (iv) The students are told that they should have used a volumetric pipette rather than a measuring cylinder to measure out 25 cm^3 of bleach.

What effect would this have on your answer to **part (iii)**?

.....
..... [1]

24 Some students study the equilibrium shown in **equation 24.1**.



(a) The reaction is in dynamic equilibrium.

Describe what is happening to the concentrations of the gases and the rates of the forward and back reactions at equilibrium.

concentrations

.....

rates

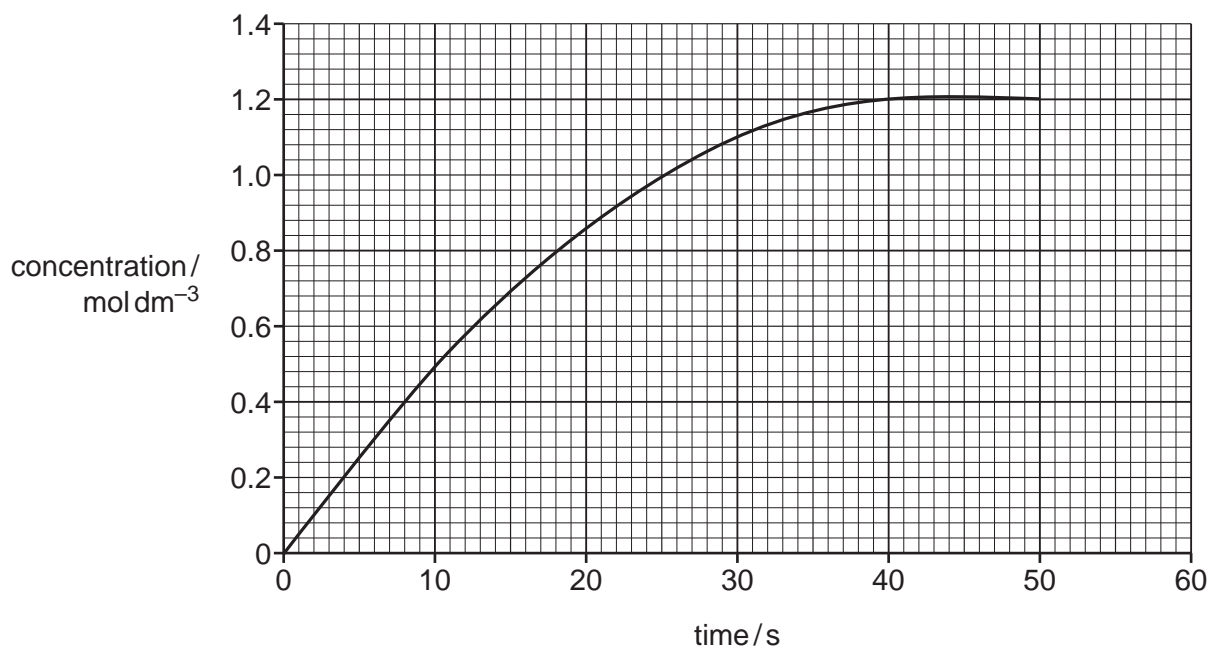
.....

[2]

At 298 K mostly N_2O_4 is present in the equilibrium in **equation 24.1**.

A 1.0 dm^3 flask contains the equilibrium mixture at 298 K.

The flask is placed in an oil bath at 600 K and the students find data for the changing NO_2 concentration. They plot these on the graph below.



(b) The concentration of N_2O_4 starts at 1.0 mol dm^{-3} and reaches equilibrium again at 0.40 mol dm^{-3} .

Sketch a line on the axes above to show how the concentration of N_2O_4 changes.

[2]

15

- (c) Use data from the graph to calculate the numerical value of K_c for the equilibrium in **equation 24.1** at 600 K.

K_c value = [2]

- (d) Use **equation 24.1** to explain why more NO_2 is formed at 600 K, compared with 298 K.

.....
.....
.....
.....
.....
.....
..... [2]

- (e) The students find data for repeating the experiment with the oil bath at 700 K.

They notice that after 10 s the concentration of NO_2 is 0.60 mol dm^{-3} .

Explain this observation with the relevant chemistry.

.....
.....
.....
.....
.....
..... [2]

END OF QUESTION PAPER

ADDITIONAL ANSWER SPACE

If additional space is required, you should use the following lined page(s). The question number(s) must be clearly shown in the margin(s).

A large rectangular area with a solid vertical line on the left side and horizontal dotted lines across the rest of the page, providing space for writing answers.



Oxford Cambridge and RSA

Copyright Information

OCR is committed to seeking permission to reproduce all third-party content that it uses in its assessment materials. OCR has attempted to identify and contact all copyright holders whose work is used in this paper. To avoid the issue of disclosure of answer-related information to candidates, all copyright acknowledgements are reproduced in the OCR Copyright Acknowledgements Booklet. This is produced for each series of examinations and is freely available to download from our public website (www.ocr.org.uk) after the live examination series.

If OCR has unwittingly failed to correctly acknowledge or clear any third-party content in this assessment material, OCR will be happy to correct its mistake at the earliest possible opportunity.

For queries or further information please contact The OCR Copyright Team, The Triangle Building, Shaftesbury Road, Cambridge CB2 8EA.

OCR is part of Cambridge University Press & Assessment, which is itself a department of the University of Cambridge.